

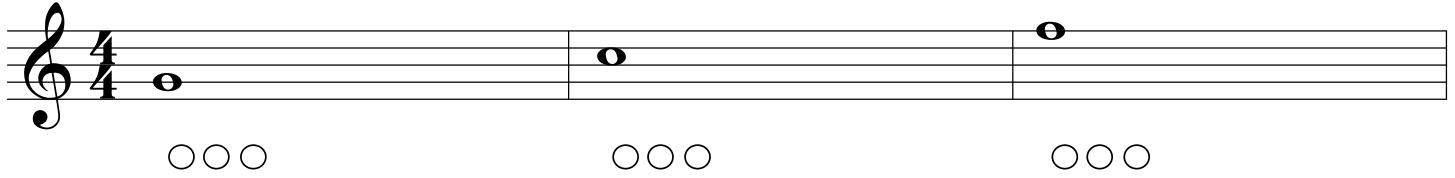
Trumpet in B \flat

Name: _____

Blank Fingering Chart #3

Step 1: Identify & Label each note / Step 2: Fill in the correct fingering for each note

1. _____

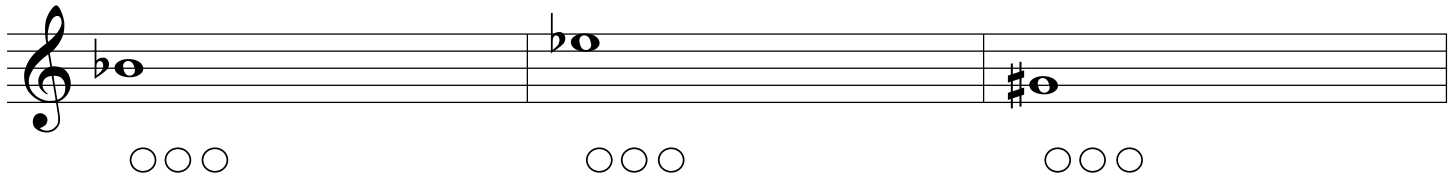


A musical staff in 4/4 time with a treble clef. The first measure contains a quarter note on G4. The second measure contains a quarter note on A4. The third measure contains a quarter note on B4. Below each measure are three empty circles for fingering.

2. _____

3. _____

4. _____

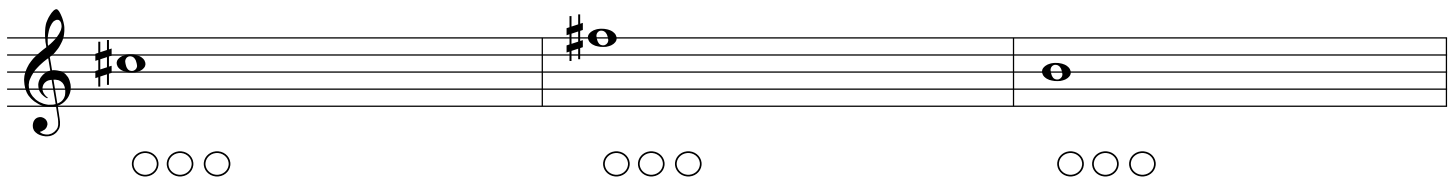


A musical staff in 4/4 time with a treble clef. The first measure contains a quarter note on B \flat 4. The second measure contains a quarter note on C5 with a flat sign. The third measure contains a quarter note on D5 with a sharp sign. Below each measure are three empty circles for fingering.

5. _____

6. _____

7. _____




A musical staff in 4/4 time with a treble clef. The first measure contains a quarter note on D5 with a sharp sign. The second measure contains a quarter note on E5 with a sharp sign. The third measure contains a quarter note on F5. Below each measure are three empty circles for fingering.

8. _____

9. _____

10. _____



A musical staff in 4/4 time with a treble clef. The first measure contains a quarter note on G4. The second measure contains a quarter note on A4. The third measure contains a quarter note on B4. The fourth measure contains a quarter note on C5. Below each measure are three empty circles for fingering.

11. _____

12. _____

13. _____